



UNIVERSITY OF CAMBRIDGE INTERNATIONAL EXAMINATIONS
General Certificate of Education Advanced Subsidiary Level and Advanced Level

GEOGRAPHY

9696/32

Paper 3 Advanced Human Options

October/November 2012

INSERT

1 hour 30 minutes

READ THESE INSTRUCTIONS FIRST

This Insert contains all the Figures and the Table referred to in the questions.

This document consists of **4** printed pages.



Fig. 1 for Question 1

Models of two agricultural systems

Extensive subsistence farming

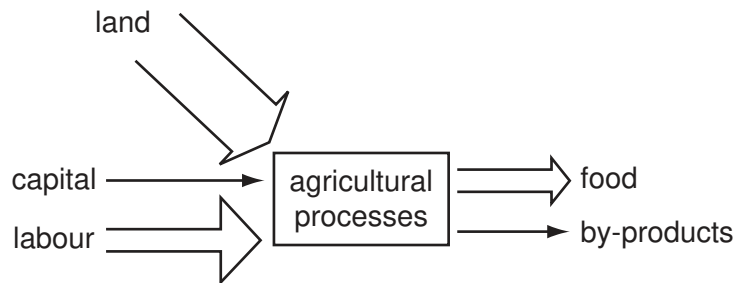


Fig. 1A

Intensive commercial farming

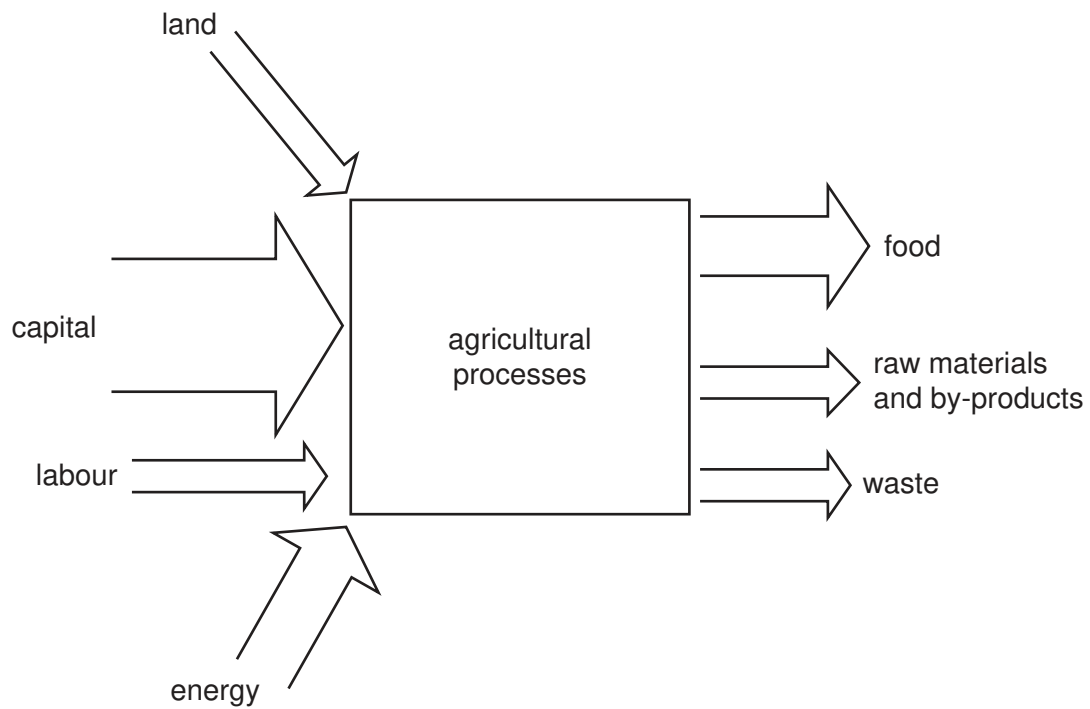


Fig. 1B

Fig. 2 for Question 3

Global pattern of energy consumption per person, 2009

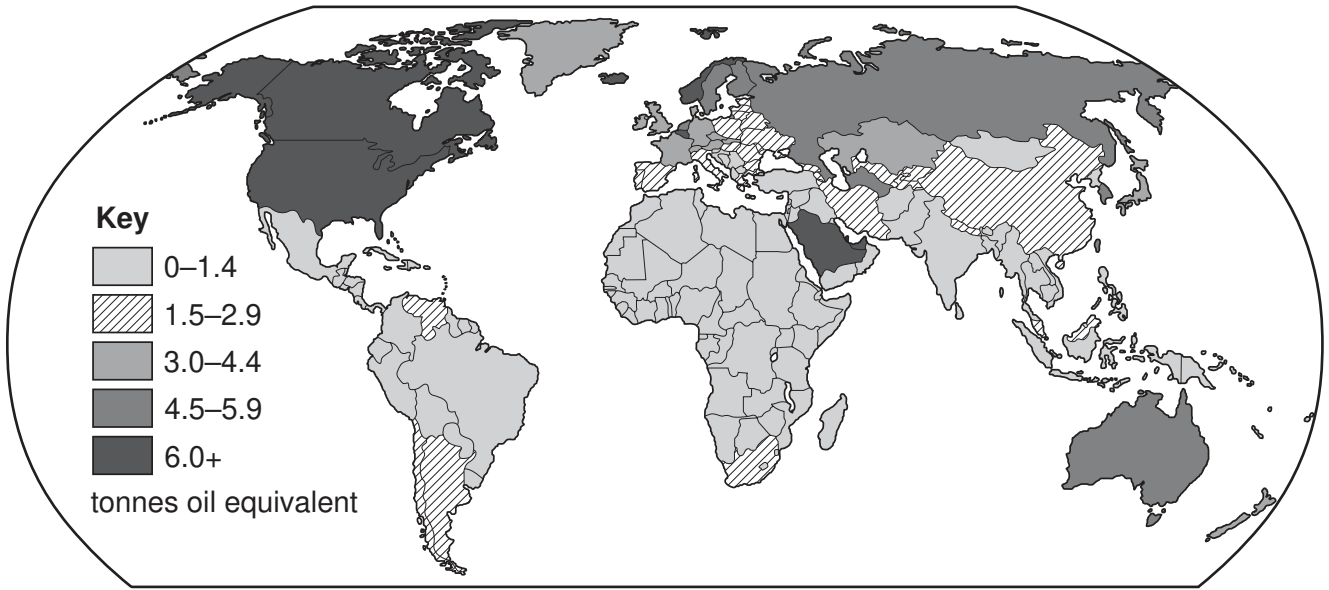


Fig. 3 for Question 5

The trade balance for a LEDC in 1999 and 2009

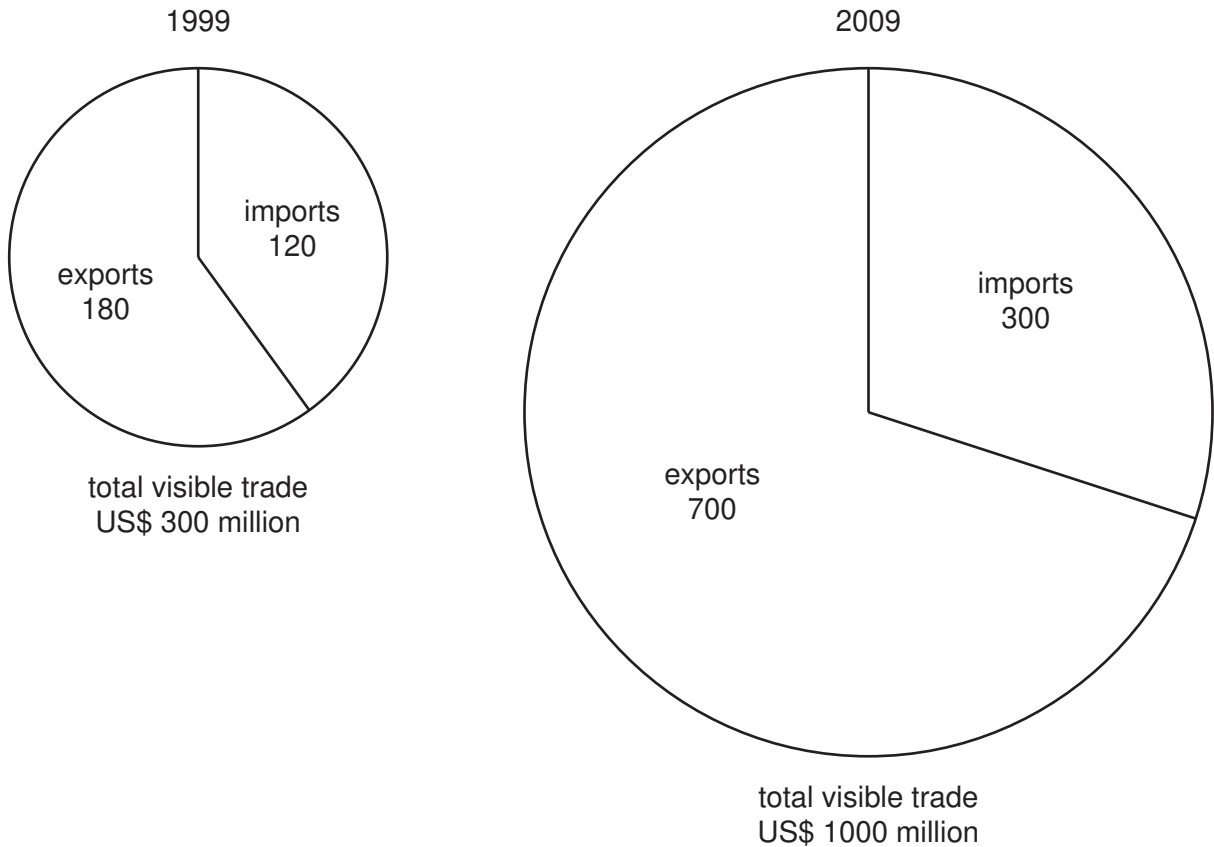


Table 1 for Question 7

Top TNCs in banking and financial services, 2011

| TNC | country of origin | total assets in US\$ billions | number of countries where the TNC operates |
|------------------------|-------------------|-------------------------------|--|
| Citigroup | USA | 1300 | 77 |
| UBS | Switzerland | 1200 | 48 |
| Allianz Group | Germany | 1200 | 48 |
| Mizuho Financial Group | Japan | 1100 | 15 |
| Crédit Agricole | France | 1100 | 41 |
| HSBC | UK | 1000 | 48 |
| Deutsche Bank | Germany | 1000 | 40 |

Permission to reproduce items where third-party owned material protected by copyright is included has been sought and cleared where possible. Every reasonable effort has been made by the publisher (UCLES) to trace copyright holders, but if any items requiring clearance have unwittingly been included, the publisher will be pleased to make amends at the earliest possible opportunity.

University of Cambridge International Examinations is part of the Cambridge Assessment Group. Cambridge Assessment is the brand name of University of Cambridge Local Examinations Syndicate (UCLES), which is itself a department of the University of Cambridge.